


WHAT TIME IS IT? Scrivi l'ora sotto ogni orologio



It's 5 o'clock




It's o'clock




.....



.....



.....




.....



.....




.....



.....

WHAT TIME IS IT? Leggi l'ora e disegna le lancette



It's 4 o'clock



It's 11 o'clock



It's 1 o'clock



It's 8 o'clock



It's 9 o'clock



It's 2 o'clock



It's 5 o'clock



It's 12 o'clock



It's 10 o'clock